


SOLVING SIMULTANEOUS EQUATIONS GRAPHICALLY

Name: _____

Plot suitable straight lines to solve the following simultaneous equations:


Q1. $x + y = 4$

$2x - y = 6$




Q2. $y = 3x + 1$

$y = 5 - 2x$



Q3. $2x + 3y = 12$

$4x - 3y = 12$



Q4. $y = 6 - 2x$

$x + 3y - 8 = 0$

